

©RoyalBaloo.com

Autumn Word Problems

Thanks for downloading the Autumn Word Problems
Be sure to check back for more Printables!

Please note the terms of use:

These printables are provided free of charge and are for personal use only.

You may:

Print as many copies as you'd like

Use them in a group or classroom setting

Share the link to my blog to other people who are interested in the pack

Post online about the pack giving proper credit back to RoyalBaloo.com

You may not:

Sell or distribute this file

Host this file on your own website

Upload this file to a shared website (i.e. 4shared.com)

Claim these files or sell them as your own

Link directly to the pdf file online

Print and sell them to others

I reserve the right to change these terms of use at any time.



Graphics: Purchased from [Melonheadz Illustrations](#),

[KPM Doodles](#) , [Mycutegraphic.com](#),





and [Scrappin Doodles](#).



Thanks Erin @Royal Baloo




There were 2 apples on the tree
and 3 apples on the ground.
How many apples were there?

$$\underline{\quad} + \underline{\quad} = \underline{\quad}$$



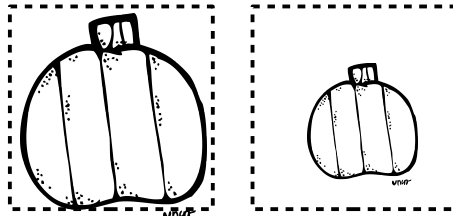
Jacob raked 1 pile of leaves
And Anthony raked up 2 piles of leaves.
How many piles of leaves did they rake?

$$\underline{\quad\quad} + \underline{\quad\quad} = \underline{\quad\quad}$$



We picked 1 big pumpkin
And 1 small pumpkin.
How many pumpkins did we pick?

$$\underline{\quad} + \underline{\quad} = \underline{\quad}$$



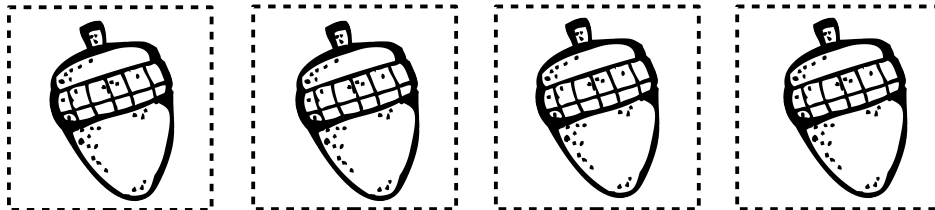
Liam ate 1 green apple
and 4 red apples.
How many apples did he eat?

$$\underline{\quad} + \underline{\quad} = \underline{\quad}$$




We found 2 small acorns
and 2 big acorns.
How many acorns did we find?

$$\underline{\quad} + \underline{\quad} = \underline{\quad}$$



We picked 5 sunflowers. There were
still 4 sunflowers left in the field.
How many sunflowers were there in total?



$$\underline{\quad\quad} + \underline{\quad\quad} = \underline{\quad\quad}$$

Madison baked 6 apple pies and
2 pumpkin pies.

How many pies did she bake?



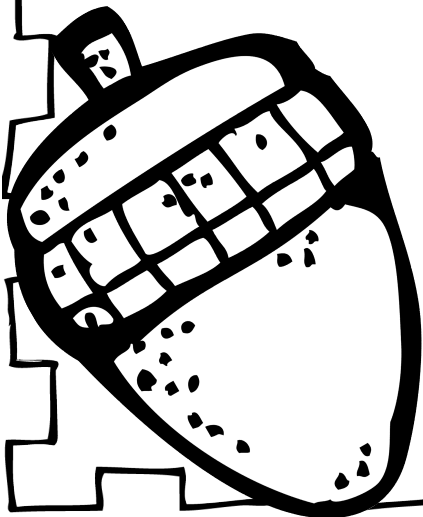
$$\underline{\quad\quad} + \underline{\quad\quad} = \underline{\quad\quad}$$

©RoyalBaloo.com

A squirrel has 4 acorns stored away.

He found 3 more.


How many acorns does he have?



$$\underline{\quad} + \underline{\quad} = \underline{\quad}$$

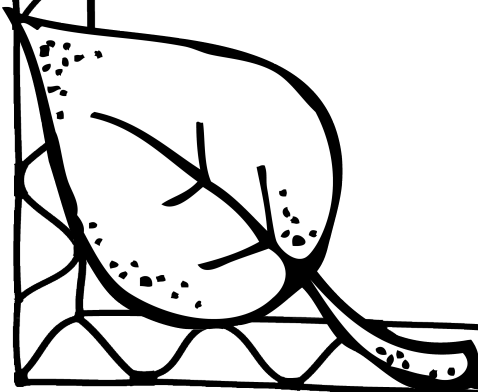
©RoyalBaloo.com

We bought 3 large pumpkins and
3 small pumpkins.
How many pumpkins did we buy?



$$\underline{\hspace{2cm}} + \underline{\hspace{2cm}} = \underline{\hspace{2cm}}$$

7 brown leaves fell off a tree.
And 1 yellow leaf fell off a tree.
How many leaves fell off the tree?



$$\underline{\quad} + \underline{\quad} = \underline{\quad}$$


There were 12 apples in one basket,
And 5 apples in another.
How many apples were there in total?



$$\underline{\quad\quad} + \underline{\quad\quad} = \underline{\quad\quad}$$


©RoyalBaloo.com

There were 7 turkeys in a pen,
And 5 outside of the pen.
How many turkeys were the in total?






$$\underline{\quad\quad} + \underline{\quad\quad} = \underline{\quad\quad}$$

A farmer had 9 bales of hay in the field,
And 4 more bales of hay in the barn.
How many bales of hay did he have?



$$\underline{\quad\quad} + \underline{\quad\quad} = \underline{\quad\quad}$$

There were 6 brown leaves, 5 red leaves,
and 3 yellow leaves left on a tree.
How many leaves in total were there?




$$\underline{\quad} + \underline{\quad} + \underline{\quad} = \underline{\quad}$$


©RoyalBaloo.com

There were 8 tall pumpkins, 5 short pumpkins and 4 round pumpkins left at the pumpkin patch.
How many pumpkins were there in total?

$$\underline{\quad} + \underline{\quad} + \underline{\quad} = \underline{\quad}$$




Aiden and Becky raked 11 piles of leaves. Aiden raked 5 piles. How many did Becky rake?



$$\underline{\hspace{2cm}} - \underline{\hspace{2cm}} = \underline{\hspace{2cm}}$$

There were 10 pumpkins on a vine.
We picked 7 pumpkins.
How many were left?



$$\underline{\quad\quad\quad} - \underline{\quad\quad\quad} = \underline{\quad\quad\quad}$$

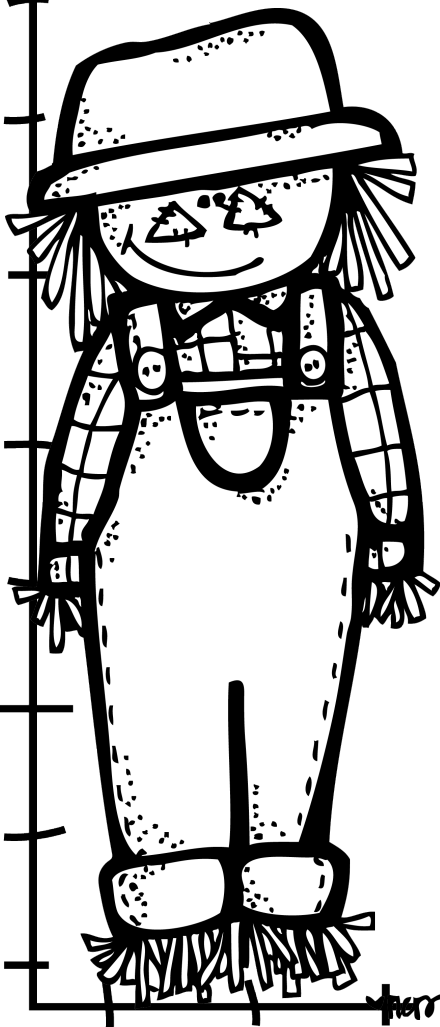
There were 15 apples on a tree.
7 of the apples fell off.
How many were left?



$$\underline{\quad\quad\quad} - \underline{\quad\quad\quad} = \underline{\quad\quad\quad}$$

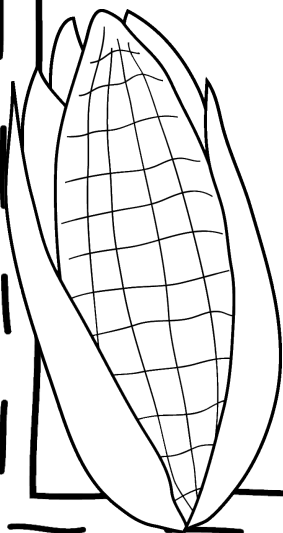
©RoyalBaloo.com

There were 12 ravens on a scarecrow.
4 of the ravens were scared away.
How many were left?



$$\underline{\quad\quad\quad} - \underline{\quad\quad\quad} = \underline{\quad\quad\quad}$$

Gibson and Emma husked 19 ears of corn. Gibson husked 10 ears. How many did Emma husk?



$$\underline{\quad\quad\quad} - \underline{\quad\quad\quad} = \underline{\quad\quad\quad}$$